



Number Bonds Problem Cards

Adam and Emily are each thinking of the same number.



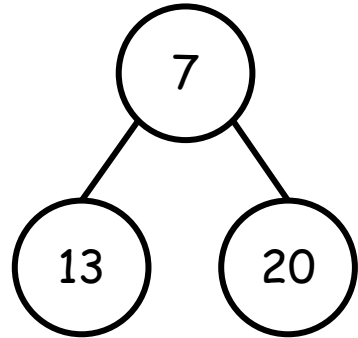
I counted 7 different number bonds for this number.

I counted 13 different number bonds.



Who is correct? Explain the mistake that has been made.

Spot the Mistake



Teddy has 11 raffle tickets.

He buys 7 more.

How many raffle tickets does he have now?

Show your answer on a number line.

I am thinking of a one-digit number and a two-digit number. When I add them together my answer is 17



What two numbers could Dana be thinking of?

Is this the only possible answer?

Always, sometimes, never.....

The bigger a number, the more number bonds it has.

Explain your answer.



My number has 9 different number bonds.

What number could Jeremy be thinking of?

Is this the only possible answer?